















Name: _____

Date: _____

Time: ____ : ____ - ____ : ____

Subtract to find each difference.

1	2	3	4	5	6	7	8	9	10
---	---	---	---	---	---	---	---	---	----

$8 - 1 = \square$ 	$7 - 1 = \square$ 	$7 - 1 = \square$ 	$9 - 5 = \square$ 	$6 - 1 = \square$ 	$6 - 1 = \square$ 
$7 - 2 = \square$ 	$4 - 3 = \square$ 	$4 - 3 = \square$ 	$7 - 2 = \square$ 	$7 - 6 = \square$ 	$7 - 6 = \square$ 
$8 - 5 = \square$ 	$9 - 4 = \square$ 	$9 - 4 = \square$ 