






Name: \_\_\_\_\_

Date: \_\_\_\_\_

Time: \_\_\_\_\_ : \_\_\_\_\_ - \_\_\_\_\_ : \_\_\_\_\_

Subtract and write the correct number in the box.

	$\begin{array}{r} 6 \\ - 3 \\ \hline \\ \hline \end{array}$
	$\begin{array}{r} 6 \\ - 1 \\ \hline \\ \hline \end{array}$
	$\begin{array}{r} 8 \\ - 5 \\ \hline \\ \hline \end{array}$
	$\begin{array}{r} 9 \\ - 2 \\ \hline \\ \hline \end{array}$
	$\begin{array}{r} 7 \\ - 3 \\ \hline \\ \hline \end{array}$