

Name: \_\_\_\_\_

Date: \_\_\_\_\_


Time: \_\_\_\_ : \_\_\_\_ - \_\_\_\_ : \_\_\_\_

Look at the clock and write down the time.

- The short hand (→) is for hours.
- The long hand (→) is for minutes.



.....  
:.....

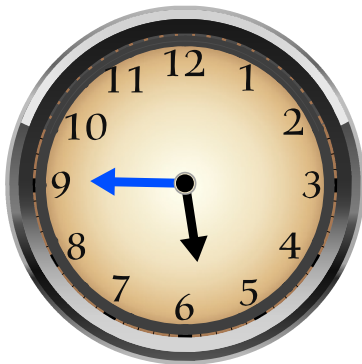


.....  
:.....



.....  
:.....


-----



.....  
:.....



.....  
:.....



.....  
:.....