


Name: _____

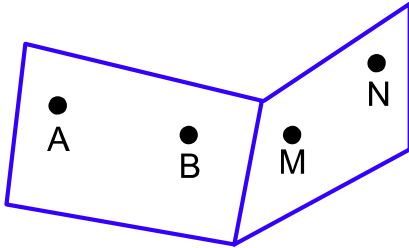
Date: _____

Time: _____ : _____ - _____ : _____

Tick mark the correct option in each question.

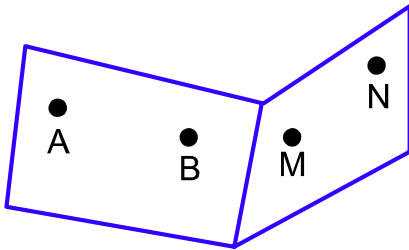


1. How many line segments are there in this picture?



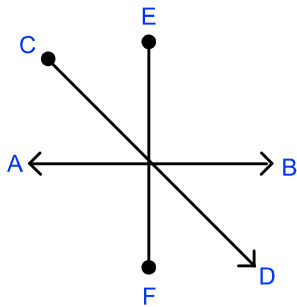
- 1. 5
- 2. 7
- 3. 6

2. If you join all the points how many lines will be formed?



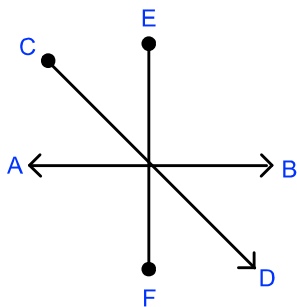
- 1. 5
- 2. 3
- 3. 4

3. AB is an example of a _____.



- 1. Point
- 2. Ray
- 3. Line

4. EF is a _____.



- 1. Point
- 2. Ray
- 3. Line Segment

5. CD is a _____.



- 1. Line
- 2. Line Segment
- 3. Ray