

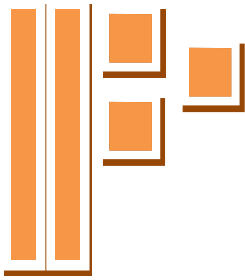


Name: _____

Date: _____

Time: ____ : ____ - ____ : ____

Read each question, and circle the correct answer.



1. What does  denote if  is Tens and  is Ones?

A. $200 + 20 + 3$

B. $200 + 3$

C. $20 + 3$

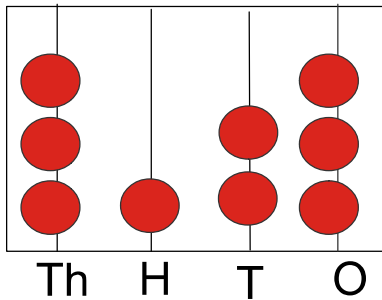
2. If  represents 1 ones and  represent 1 Tens, then what would  represent ?

A. 2 Tens + 2 Ones

B. 22 Tens

C. 11Tens + 2 Ones

3. State whether True or False.



= Three thousand one hundred three


A. True

B. False

4. What does the following denote?



Hundreds



Tens



Ones

A. $100 + 300 + 200$

B. $100 + 300 + 2$

C. $100 + 30 + 2$