

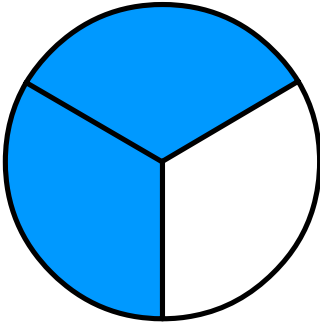
Name: _____

Date: _____

Time: ____ : ____ - ____ : ____

Circle the correct fraction from the given choices.

1.




$$\frac{3}{4}$$

$$\frac{2}{3}$$

$$\frac{1}{4}$$

2.




$$\frac{3}{4}$$

$$\frac{1}{5}$$

$$\frac{2}{3}$$

3.




$$\frac{2}{4}$$

$$\frac{4}{5}$$

$$\frac{5}{6}$$

4.



$$\frac{4}{8}$$

$$\frac{1}{3}$$

$$\frac{1}{2}$$