

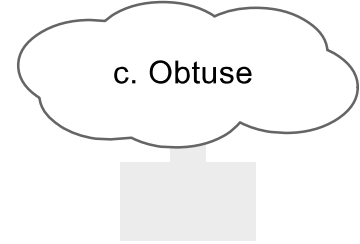
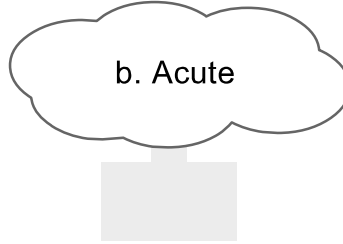
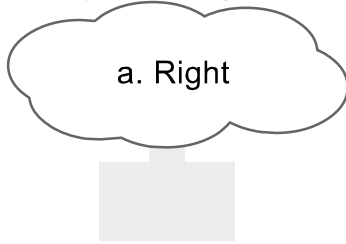
Name: _____

Date: _____

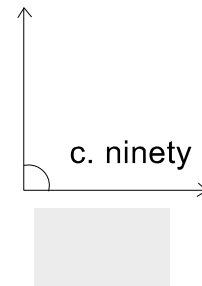
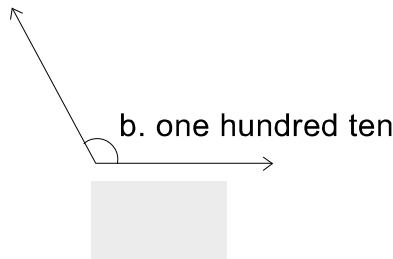
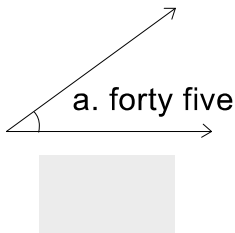
Time: _____

Read each question and tick mark the correct option.

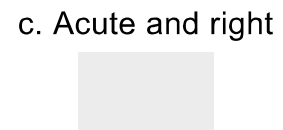
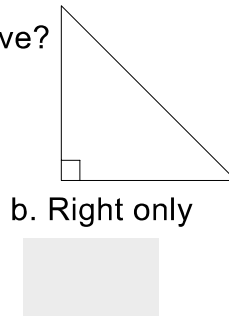
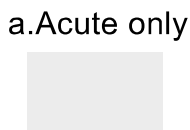
1. Jeremy is holding his leg at a 74° angle. He moves his leg to make the angle bigger by 23° . What type of angle is Jeremy's leg now?



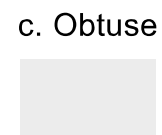
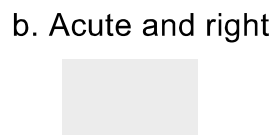


2. Which angle is equal to 90° ?



3. What type of angles does this triangle have?



4. Steven and his friend are walking next to railroad tracks. When they look down they realize that the tracks are making angles. What type of angles?



5. Which angle is an acute angle?

