


Name: \_\_\_\_\_

Date: \_\_\_\_\_


Time: \_\_\_\_ : \_\_\_\_ - \_\_\_\_ : \_\_\_\_

Use each fact family to write down two subtraction number sentences.




**15 - 8 = 7**  
-----

**15 - 7 = 8**  
-----




**17 - 8 = 9**  
-----

**17 - 9 = 8**  
-----



**16 - 7 = 9**  
-----

**16 - 9 = 7**  
-----



**13 - 5 = 8**  
-----

**13 - 8 = 5**  
-----