










Name: _____

Date: _____

Time: ____ : ____ - ____ : ____

Subtract to find each difference.

1	2	3	4	5	6	7	8	9	10
---	---	---	---	---	---	---	---	---	----

$5 - 2 = \boxed{3}$ 	$4 - 2 = \boxed{2}$ 
$4 - 1 = \boxed{3}$ 	$6 - 3 = \boxed{3}$ 
$6 - 2 = \boxed{4}$ 	$5 - 1 = \boxed{4}$ 
$3 - 2 = \boxed{1}$ 	$7 - 3 = \boxed{4}$ 
$9 - 2 = \boxed{7}$ 	$5 - 3 = \boxed{2}$ 