


Name: \_\_\_\_\_

Date: \_\_\_\_\_

Time: \_\_\_\_ : \_\_\_\_ - \_\_\_\_ : \_\_\_\_

Look at the time given and draw the missing hand on the face of the clock.

- The short hand (→) is for hours.
- The long hand (→) is for minutes.



**09 : 05**



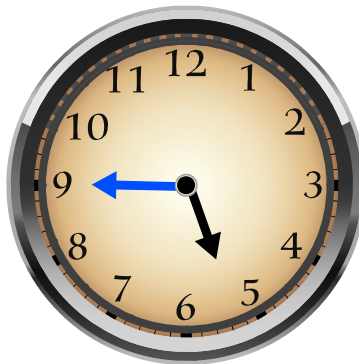
**08 : 20**



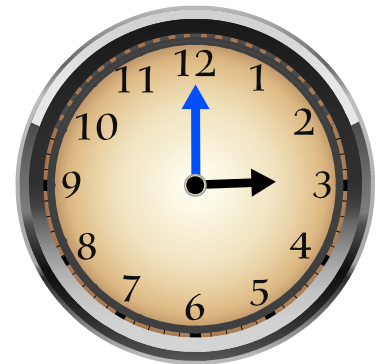
**11 : 40**



**03 : 50**



**05 : 45**



**03 : 00**