


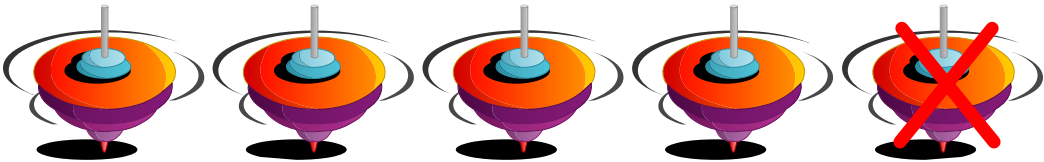



Name: _____

Date: _____

Time: ____ : ____ - ____ : ____

Subtract and write the correct number in the box.

	$\begin{array}{r} 4 \\ - 2 \\ \hline 2 \end{array}$
	$\begin{array}{r} 3 \\ - 2 \\ \hline 1 \end{array}$
	$\begin{array}{r} 6 \\ - 2 \\ \hline 4 \end{array}$
	$\begin{array}{r} 5 \\ - 1 \\ \hline 4 \end{array}$
	$\begin{array}{r} 5 \\ - 4 \\ \hline 1 \end{array}$