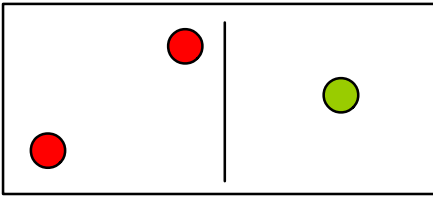


Name: \_\_\_\_\_

Date: \_\_\_\_\_

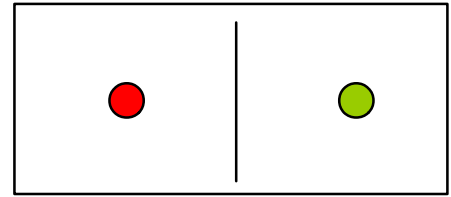
Time: \_\_\_\_\_ : \_\_\_\_\_ - \_\_\_\_\_ : \_\_\_\_\_

**Count the dots and add them.**



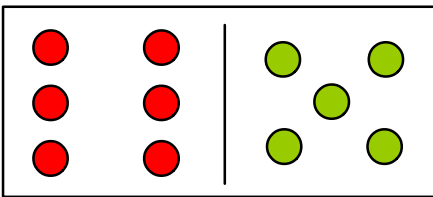
  2          1  

Total :-   3  



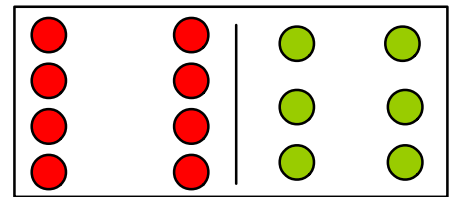
  1          1  

Total :-   2  



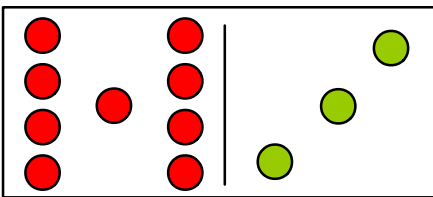
  6          5  

Total :-  11 



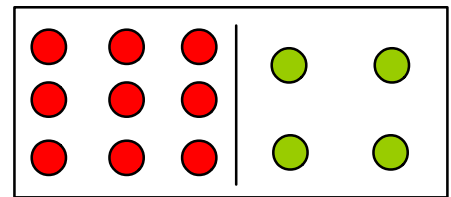
  8          6  

Total :-  14 



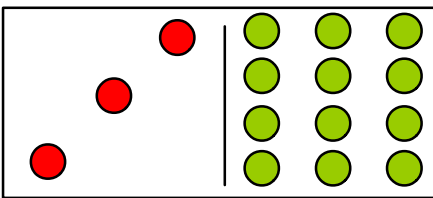
  9          3  

Total :-  12 



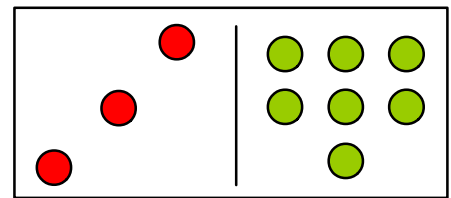
  9          4  

Total :-  13 



  3         12 

Total :-  15 



  3          7  

Total :-  10