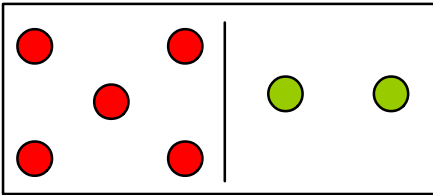


Name: \_\_\_\_\_

Date: \_\_\_\_\_

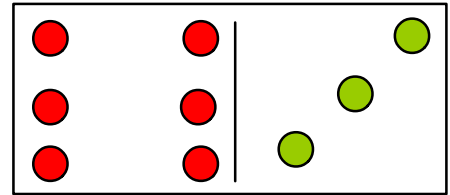
Time: \_\_\_\_\_ : \_\_\_\_\_ - \_\_\_\_\_ : \_\_\_\_\_

**Count the dots and add them.**



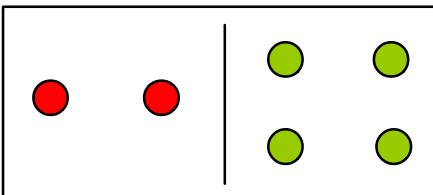
5                  2

Total :- 7



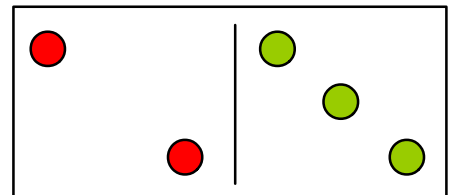
6                  3

Total :- 9



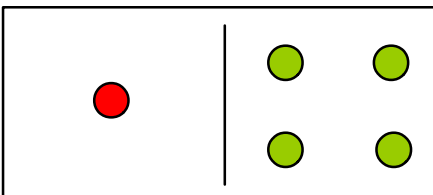
2                  4

Total :- 6



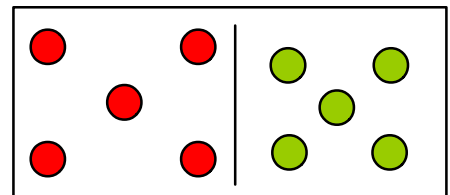
2                  3

Total :- 5



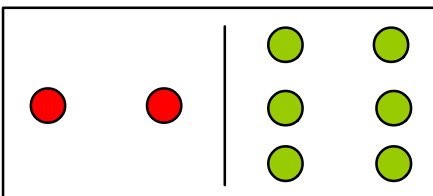
1                  4

Total :- 5



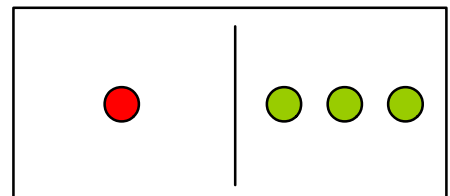
5                  5

Total :- 10



2                  6

Total :- 8



1                  3

Total :- 4