


Name: \_\_\_\_\_


Date: \_\_\_\_\_

Time: \_\_\_\_ : \_\_\_\_ - \_\_\_\_ : \_\_\_\_


Color the boxes according to the fraction given.



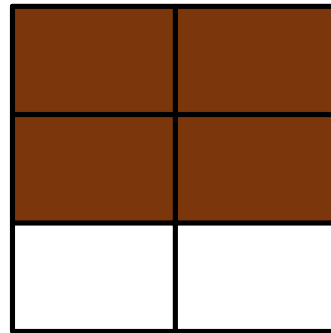
$$\frac{2}{3}$$




$$\frac{1}{2}$$




$$\frac{2}{4}$$



$$\frac{4}{6}$$



$$\frac{2}{4}$$



$$\frac{6}{8}$$